

國立臺北科技大學 113 學年度碩士班招生考試

系所組別：4201、4202、4203、4204 經營管理系碩士班

第一節 統計學 試題

第 1 頁 共 2 頁

注意事項：

1. 本試題共兩大題，共 100 分。
2. 不必抄題，作答時請將試題題號及答案依照順序寫在答案卷上。
3. 全部答案均須在答案卷之答案欄內作答，否則不予計分。

一、選擇題(單選題，每題 5 分，共 6 題，合計 30 分)

1. The school teachers are organizing the data of students' state of birth. What level of measurement to which the variable "a student's state of birth" belongs?
 - (A) Nominal
 - (B) Ordinal
 - (C) Interval
 - (D) Ratio
2. The hourly wages for a sample of part-time employees at a restaurant are \$101, \$97, \$103, \$88, \$106, \$80, \$110, \$78, \$87, and \$101. What is the sample variance?
 - (A) 11.12
 - (B) 111.29
 - (C) 123.66
 - (D) 10.55
3. In May, an investor purchased 500 shares of AAA (a software company) stock at \$50 per share. In June, he purchased an additional 300 shares at \$38 per share. In July, he purchased an additional 400 shares at \$45. What is the weighted mean price per share?
 - (A) 44.33
 - (B) 45.33
 - (C) 26.78
 - (D) 9.02

4. ABC university decided to conduct a large-scale survey to find the mean amount of time students spent playing mobile game per week. A population's standard deviation is 2 hours. The estimate of the population mean of playing time should be within 0.25 hour. The 95% level of confidence is to be used. What is the required sample size?

- (A) 246
- (B) 732
- (C) 16
- (D) 63

5. Three cards will be selected from an ordinary deck of 52 playing cards without replacement. What is the probability of getting the first two cards are diamonds and the next one cards is hearts?

- (A) 0.00036
- (B) 0.0769
- (C) 0.0144
- (D) 0.0153

6. According to a government report, individuals in Taiwan typically sleep an average of 8 hours per day. A survey of 49 randomly selected students from the National Taipei University of Technology (NTUT) indicated that their daily average sleep duration is 7.5 hours. The standard deviation of the sample was 0.8 hour. Assuming that the hypothesis tests are conducted using a significance level equal to 0.05 and given the following hypotheses: $H_0: \mu \geq 8$; $H_1: \mu < 8$, which of the following statement is true?

- (A) Reject H_0 . We can conclude that the NTUT students sleep less than the typical Taiwanese.
- (B) Do not Reject H_0 . We can conclude that the NTUT students sleep less than the typical Taiwanese.
- (C) Reject H_0 . We cannot conclude that the NTUT students sleep less than the typical Taiwanese.
- (D) Do not Reject H_0 . We cannot conclude that the NTUT students sleep less than the typical Taiwanese.

二、計算題(共四題，合計 70 分)

(一)The probability distribution of the weights of international parcels processed by the post office each day, sent to the Australia region, is as follows (measured in Kilograms)

Parcel weight	10	20	30	40	50
Probability	0.25	0.1	0.35	0.2	0.1

1. What is the variance of the weight of parcels per day? (5 分)
2. Using Chebyshev's theorem to determine the weight range of a set containing 60% of the parcels. (10 分)

(二)The Taiwan government wants to estimate the mean number of eggs consumption weekly per family. A sample of 25 families reveals the mean weekly consumption to be 20 eggs with a standard deviation of 3 eggs. Assume the population distribution is normal.

1. Develop the 95% confidence interval for the population mean. (10 分)
2. What can be asserted with 99% confidence about the maximum error if $\bar{x}=20$ eggs is used as an estimate of the mean of the population sampled? (5 分)

(三)According to a report from the local government, the annual expenditure on insurance for each household in New Taipei City follows the normal probability distribution with a mean of NT\$35,000 and a population standard deviation of NT\$ 4000. A recent survey conducted by a magazine company found, for a sample of 100 households, the mean of annual expenditure on insurance was NT\$34,500. At the .10 significance level, can we conclude that the mean of annual expenditure on insurance is not equal to \$35,000?

1. What is the p-value? (10 分)
2. What is your decision regarding the null hypothesis based on the p-value? (5 分)

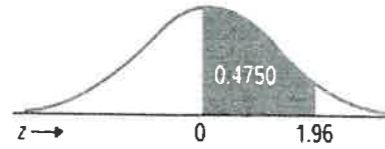
(四)The following are the gaming hours collected from each of three players randomly selected from four days. Test the hypothesis at the 0.05 significance level, can we conclude that there is a difference in the mean of the time players spend gaming?

	Player 1	Player 2	Player3
Day 1	2	5	5
Day 2	3	3	7
Day 3	4	6	5
Day 4	3	4	6

1. Compute SSE (the sum of the squared errors) (10 分)
2. Compute the value of F (10 分)
3. What is your decision regarding the null hypothesis? (5 分)

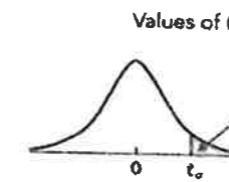
附表 1

Areas under the Normal Curve



z	0.00	0.01	0.02	0.03	0.04	0.05	0.06	0.07	0.08	0.09
0.0	0.0000	0.0040	0.0080	0.0120	0.0160	0.0199	0.0239	0.0279	0.0319	0.0359
0.1	0.0398	0.0438	0.0478	0.0517	0.0557	0.0596	0.0636	0.0675	0.0714	0.0753
0.2	0.0793	0.0832	0.0871	0.0910	0.0948	0.0987	0.1026	0.1064	0.1103	0.1141
0.3	0.1179	0.1217	0.1255	0.1293	0.1331	0.1368	0.1406	0.1443	0.1480	0.1517
0.4	0.1554	0.1591	0.1628	0.1664	0.1700	0.1736	0.1772	0.1808	0.1844	0.1879
0.5	0.1915	0.1950	0.1985	0.2019	0.2054	0.2088	0.2123	0.2157	0.2190	0.2224
0.6	0.2257	0.2291	0.2324	0.2357	0.2389	0.2422	0.2454	0.2486	0.2517	0.2549
0.7	0.2580	0.2611	0.2642	0.2673	0.2704	0.2734	0.2764	0.2794	0.2823	0.2852
0.8	0.2881	0.2910	0.2939	0.2967	0.2995	0.3023	0.3051	0.3078	0.3106	0.3133
0.9	0.3159	0.3186	0.3212	0.3238	0.3264	0.3289	0.3315	0.3340	0.3365	0.3389
1.0	0.3413	0.3438	0.3461	0.3485	0.3508	0.3531	0.3554	0.3577	0.3599	0.3621
1.1	0.3643	0.3665	0.3686	0.3708	0.3729	0.3749	0.3770	0.3790	0.3810	0.3830
1.2	0.3849	0.3869	0.3888	0.3907	0.3925	0.3944	0.3962	0.3980	0.3997	0.4015
1.3	0.4032	0.4049	0.4066	0.4082	0.4099	0.4115	0.4131	0.4147	0.4162	0.4177
1.4	0.4192	0.4207	0.4222	0.4236	0.4251	0.4265	0.4279	0.4292	0.4306	0.4319
1.5	0.4332	0.4345	0.4357	0.4370	0.4382	0.4394	0.4406	0.4418	0.4429	0.4441
1.6	0.4452	0.4463	0.4474	0.4484	0.4495	0.4505	0.4515	0.4525	0.4535	0.4545
1.7	0.4554	0.4564	0.4573	0.4582	0.4591	0.4599	0.4608	0.4616	0.4625	0.4633
1.8	0.4641	0.4649	0.4656	0.4664	0.4671	0.4678	0.4686	0.4693	0.4699	0.4706
1.9	0.4713	0.4719	0.4726	0.4732	0.4738	0.4744	0.4750	0.4756	0.4761	0.4767
2.0	0.4772	0.4778	0.4783	0.4788	0.4793	0.4798	0.4803	0.4808	0.4812	0.4817
2.1	0.4821	0.4826	0.4830	0.4834	0.4838	0.4842	0.4846	0.4850	0.4854	0.4857
2.2	0.4861	0.4864	0.4868	0.4871	0.4875	0.4878	0.4881	0.4884	0.4887	0.4890
2.3	0.4893	0.4896	0.4898	0.4901	0.4904	0.4906	0.4909	0.4911	0.4913	0.4916
2.4	0.4918	0.4920	0.4922	0.4925	0.4927	0.4929	0.4931	0.4932	0.4934	0.4936
2.5	0.4938	0.4940	0.4941	0.4943	0.4945	0.4946	0.4948	0.4949	0.4951	0.4952
2.6	0.4953	0.4955	0.4956	0.4957	0.4959	0.4960	0.4961	0.4962	0.4963	0.4964
2.7	0.4965	0.4966	0.4967	0.4968	0.4969	0.4970	0.4971	0.4972	0.4973	0.4974
2.8	0.4974	0.4975	0.4976	0.4977	0.4977	0.4978	0.4979	0.4979	0.4980	0.4981
2.9	0.4981	0.4982	0.4982	0.4983	0.4984	0.4984	0.4985	0.4985	0.4986	0.4986
3.0	0.4987	0.4987	0.4987	0.4988	0.4988	0.4989	0.4989	0.4989	0.4990	0.4990

附表 2-1



df	$t_{0.10}$	$t_{0.05}$	$t_{0.025}$	$t_{0.01}$	$t_{0.005}$	df
1	3.078	6.314	12.706	31.821	63.657	1
2	1.886	2.920	4.303	6.965	9.925	2
3	1.638	2.353	3.182	4.541	5.841	3
4	1.533	2.132	2.776	3.747	4.604	4
5	1.476	2.015	2.571	3.365	4.032	5
6	1.440	1.943	2.447	3.143	3.707	6
7	1.415	1.895	2.365	2.998	3.499	7
8	1.397	1.860	2.306	2.896	3.355	8
9	1.383	1.833	2.262	2.821	3.250	9
10	1.372	1.812	2.228	2.764	3.169	10
11	1.363	1.796	2.201	2.718	3.106	11
12	1.356	1.782	2.179	2.681	3.055	12
13	1.350	1.771	2.160	2.650	3.012	13
14	1.345	1.761	2.145	2.624	2.977	14
15	1.341	1.753	2.131	2.602	2.947	15
16	1.337	1.746	2.120	2.583	2.921	16
17	1.333	1.740	2.110	2.567	2.898	17
18	1.330	1.734	2.101	2.552	2.878	18
19	1.328	1.729	2.093	2.539	2.861	19
20	1.325	1.725	2.086	2.528	2.845	20
21	1.323	1.721	2.080	2.518	2.831	21
22	1.321	1.717	2.074	2.508	2.819	22
23	1.319	1.714	2.069	2.500	2.807	23
24	1.318	1.711	2.064	2.492	2.797	24
25	1.316	1.708	2.060	2.485	2.787	25
26	1.315	1.706	2.056	2.479	2.779	26
27	1.314	1.703	2.052	2.473	2.771	27
28	1.313	1.701	2.048	2.467	2.763	28
29	1.311	1.699	2.045	2.462	2.756	29
30	1.310	1.697	2.042	2.457	2.750	30
31	1.309	1.696	2.040	2.453	2.744	31
32	1.309	1.694	2.037	2.449	2.738	32
33	1.308	1.692	2.035	2.445	2.733	33
34	1.307	1.691	2.032	2.441	2.728	34
35	1.306	1.690	2.030	2.438	2.724	35
36	1.306	1.688	2.028	2.434	2.719	36
37	1.305	1.687	2.026	2.431	2.715	37
38	1.304	1.686	2.024	2.429	2.712	38
39	1.304	1.685	2.023	2.426	2.708	39
40	1.303	1.684	2.021	2.423	2.704	40
41	1.303	1.683	2.020	2.421	2.701	41
42	1.302	1.682	2.018	2.418	2.698	42
43	1.302	1.681	2.017	2.416	2.695	43
44	1.301	1.680	2.015	2.414	2.692	44
45	1.301	1.679	2.014	2.412	2.690	45
46	1.300	1.679	2.013	2.410	2.687	46
47	1.300	1.678	2.012	2.408	2.685	47
48	1.299	1.677	2.011	2.407	2.682	48
49	1.299	1.677	2.010	2.405	2.680	49

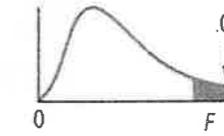
注意：背面尚有參考資料

附表 2-2

Values of t_α	df	$f_{0.10}$	$f_{0.05}$	$f_{0.025}$	$f_{0.01}$	$f_{0.005}$	df
	50	1.299	1.676	2.009	2.403	2.678	50
	51	1.298	1.675	2.008	2.402	2.676	51
	52	1.298	1.675	2.007	2.400	2.674	52
	53	1.298	1.674	2.006	2.399	2.672	53
	54	1.297	1.674	2.005	2.397	2.670	54
	55	1.297	1.673	2.004	2.396	2.668	55
	56	1.297	1.673	2.003	2.395	2.667	56
	57	1.297	1.672	2.002	2.394	2.665	57
	58	1.296	1.672	2.002	2.392	2.663	58
	59	1.296	1.671	2.001	2.391	2.662	59
	60	1.296	1.671	2.000	2.390	2.660	60
	61	1.296	1.670	2.000	2.389	2.659	61
	62	1.295	1.670	1.999	2.388	2.657	62
	63	1.295	1.669	1.998	2.387	2.656	63
	64	1.295	1.669	1.998	2.386	2.655	64
	65	1.295	1.669	1.997	2.385	2.654	65
	66	1.295	1.668	1.997	2.384	2.652	66
	67	1.294	1.668	1.996	2.383	2.651	67
	68	1.294	1.668	1.995	2.382	2.650	68
	69	1.294	1.667	1.995	2.382	2.649	69
	70	1.294	1.667	1.994	2.381	2.648	70
	71	1.294	1.667	1.994	2.380	2.647	71
	72	1.293	1.666	1.993	2.379	2.646	72
	73	1.293	1.666	1.993	2.379	2.645	73
	74	1.293	1.666	1.993	2.378	2.644	74
	75	1.293	1.665	1.992	2.377	2.643	75
	80	1.292	1.664	1.990	2.374	2.639	80
	85	1.292	1.663	1.988	2.371	2.635	85
	90	1.291	1.662	1.987	2.368	2.632	90
	95	1.291	1.661	1.985	2.366	2.629	95
	100	1.290	1.660	1.984	2.364	2.626	100
	200	1.286	1.653	1.972	2.345	2.601	200
	300	1.284	1.650	1.968	2.339	2.592	300
	400	1.284	1.649	1.966	2.336	2.588	400
	500	1.283	1.648	1.965	2.334	2.586	500
	600	1.283	1.647	1.964	2.333	2.584	600
	700	1.283	1.647	1.963	2.332	2.583	700
	800	1.283	1.647	1.963	2.331	2.582	800
	900	1.282	1.647	1.963	2.330	2.581	900
	1000	1.282	1.646	1.962	2.330	2.581	1000
	2000	1.282	1.646	1.961	2.328	2.578	2000

附表 3


Critical Values of the F-Distribution ($\alpha = .05$)



		Degrees of Freedom for the Numerator															
		1	2	3	4	5	6	7	8	9	10	12	15	20	24	30	40
Degrees of Freedom for the Denominator	1	161	200	216	225	230	234	237	239	241	242	244	246	248	249	250	251
	2	18.5	19.0	19.2	19.2	19.3	19.3	19.4	19.4	19.4	19.4	19.4	19.4	19.4	19.4	19.5	19.5
	3	10.1	9.55	9.28	9.12	9.01	8.94	8.89	8.85	8.81	8.79	8.74	8.70	8.66	8.64	8.62	8.59
	4	7.71	6.94	6.59	6.39	6.26	6.16	6.09	6.04	6.00	5.96	5.91	5.86	5.80	5.77	5.75	5.72
	5	6.61	5.79	5.41	5.19	5.05	4.95	4.88	4.82	4.77	4.74	4.68	4.62	4.56	4.53	4.50	4.46
	6	5.99	5.14	4.76	4.53	4.39	4.28	4.21	4.15	4.10	4.06	4.00	3.94	3.87	3.84	3.81	3.77
	7	5.59	4.74	4.35	4.12	3.97	3.87	3.79	3.73	3.68	3.64	3.57	3.51	3.44	3.41	3.38	3.34
	8	5.32	4.46	4.07	3.84	3.69	3.58	3.50	3.44	3.39	3.35	3.28	3.22	3.15	3.12	3.08	3.04
	9	5.12	4.26	3.86	3.63	3.48	3.37	3.29	3.23	3.18	3.14	3.07	3.01	2.94	2.90	2.86	2.83
	10	4.96	4.10	3.71	3.48	3.33	3.22	3.14	3.07	3.02	2.98	2.91	2.85	2.77	2.74	2.70	2.66
	11	4.84	3.98	3.59	3.36	3.20	3.09	3.01	2.95	2.90	2.85	2.79	2.72	2.65	2.61	2.57	2.53
	12	4.75	3.89	3.49	3.26	3.11	3.00	2.91	2.85	2.80	2.75	2.69	2.62	2.54	2.51	2.47	2.43
	13	4.67	3.81	3.41	3.18	3.03	2.92	2.83	2.77	2.71	2.67	2.60	2.53	2.46	2.42	2.38	2.34
	14	4.60	3.74	3.34	3.11	2.96	2.85	2.76	2.70	2.65	2.60	2.53	2.46	2.39	2.35	2.31	2.27
	15	4.54	3.68	3.29	3.06	2.90	2.79	2.71	2.64	2.59	2.54	2.48	2.40	2.33	2.29	2.25	2.20
	16	4.49	3.63	3.24	3.01	2.85	2.74	2.66	2.59	2.54	2.49	2.42	2.35	2.28	2.24	2.19	2.15
	17	4.45	3.59	3.20	2.96	2.81	2.70	2.61	2.55	2.49	2.45	2.38	2.31	2.23	2.19	2.15	2.10
	18	4.41	3.55	3.16	2.93	2.77	2.66	2.58	2.51	2.46	2.41	2.34	2.27	2.19	2.15	2.11	2.06
	19	4.38	3.52	3.13	2.90	2.74	2.63	2.54	2.48	2.42	2.38	2.31	2.23	2.16	2.11	2.07	2.03
	20	4.35	3.49	3.10	2.87	2.71	2.60	2.51	2.45	2.39	2.35	2.28	2.20	2.12	2.08	2.04	1.99
	21	4.32	3.47	3.07	2.84	2.68	2.57	2.49	2.42	2.37	2.32	2.25	2.18	2.10	2.05	2.01	1.96
	22	4.30	3.44	3.05	2.82	2.66	2.55	2.46	2.40	2.34	2.30	2.23	2.15	2.07	2.03	1.98	1.94
	23	4.28	3.42	3.03	2.80	2.64	2.53	2.44	2.37	2.32	2.27	2.20	2.13	2.05	2.01	1.96	1.91
	24	4.26	3.40	3.01	2.78	2.62	2.51	2.42	2.36	2.30	2.25	2.18	2.11	2.03	1.98	1.94	1.89
	25	4.24	3.39	2.99	2.76	2.60	2.49	2.40	2.34	2.28	2.24	2.16	2.09	2.01	1.96	1.92	1.87
30	4.17	3.32	2.92	2.69	2.53	2.42	2.33	2.27	2.21	2.16	2.09	2.01	1.93	1.89	1.84	1.79	
40	4.08	3.23	2.84	2.61	2.45	2.34	2.25	2.18	2.12	2.08	2.00	1.92	1.84	1.79	1.74	1.69	
60	4.00	3.15	2.76	2.53	2.37	2.25	2.17	2.10	2.04	1.99	1.92	1.84	1.75	1.70	1.65	1.59	
120	3.92	3.07	2.68	2.45	2.29	2.18	2.09	2.02	1.96	1.91	1.83	1.75	1.66	1.61	1.55	1.50	
∞	3.84	3.00	2.60	2.37	2.21	2.10	2.01	1.94	1.88	1.83	1.75	1.67	1.57	1.52	1.46	1.39	

附表 4

Critical Values of the F-Distribution ($\alpha = .01$)



		Degrees of Freedom for the Numerator																
		1	2	3	4	5	6	7	8	9	10	12	15	20	24	30	40	
Degrees of Freedom for the Denominator	1	4052	5000	5403	5625	5764	5859	5928	5981	6022	6056	6106	6157	6209	6235	6261	6287	
	2	98.5	99.0	99.2	99.2	99.3	99.3	99.4	99.4	99.4	99.4	99.4	99.4	99.4	99.4	99.5	99.5	99.5
	3	34.1	30.8	29.5	28.7	28.2	27.9	27.7	27.5	27.3	27.2	27.1	26.9	26.7	26.6	26.5	26.4	26.4
	4	21.2	18.0	16.7	16.0	15.5	15.2	15.0	14.8	14.7	14.5	14.4	14.2	14.0	13.9	13.8	13.7	13.7
	5	16.3	13.3	12.1	11.4	11.0	10.7	10.5	10.3	10.2	10.1	9.89	9.72	9.55	9.47	9.38	9.29	9.29
	6	13.7	10.9	9.78	9.15	8.75	8.47	8.26	8.10	7.98	7.87	7.72	7.56	7.40	7.31	7.23	7.14	7.14
	7	12.2	9.55	8.45	7.85	7.46	7.19	6.99	6.84	6.72	6.62	6.47	6.31	6.16	6.07	5.99	5.91	5.91
	8	11.3	8.65	7.59	7.01	6.63	6.37	6.18	6.03	5.91	5.81	5.67	5.52	5.36	5.28	5.20	5.12	5.12
	9	10.6	8.02	6.99	6.42	6.06	5.80	5.61	5.47	5.35	5.26	5.11	4.96	4.81	4.73	4.65	4.57	4.57
	10	10.0	7.56	6.55	5.99	5.64	5.39	5.20	5.06	4.94	4.85	4.71	4.56	4.41	4.33	4.25	4.17	4.17
	11	9.65	7.21	6.22	5.67	5.32	5.07	4.89	4.74	4.63	4.54	4.40	4.25	4.10	4.02	3.94	3.86	3.86
	12	9.33	6.93	5.95	5.41	5.06	4.82	4.64	4.50	4.39	4.30	4.16	4.01	3.86	3.78	3.70	3.62	3.62
	13	9.07	6.70	5.74	5.21	4.86	4.62	4.44	4.30	4.19	4.10	3.96	3.82	3.66	3.59	3.51	3.43	3.43
	14	8.86	6.51	5.56	5.04	4.69	4.46	4.28	4.14	4.03	3.94	3.80	3.66	3.51	3.43	3.35	3.27	3.27
	15	8.68	6.36	5.42	4.89	4.56	4.32	4.14	4.00	3.89	3.80	3.67	3.52	3.37	3.29	3.21	3.13	3.13
	16	8.53	6.23	5.29	4.77	4.44	4.20	4.03	3.89	3.78	3.69	3.55	3.41	3.26	3.18	3.10	3.02	3.02
	17	8.40	6.11	5.18	4.67	4.34	4.10	3.93	3.79	3.68	3.59	3.46	3.31	3.16	3.08	3.00	2.92	2.92
	18	8.29	6.01	5.09	4.58	4.25	4.01	3.84	3.71	3.60	3.51	3.37	3.23	3.08	3.00	2.92	2.84	2.84
	19	8.18	5.93	5.01	4.50	4.17	3.94	3.77	3.63	3.52	3.43	3.30	3.15	3.00	2.92	2.84	2.76	2.76
	20	8.10	5.85	4.94	4.43	4.10	3.87	3.70	3.56	3.46	3.37	3.23	3.09	2.94	2.86	2.78	2.69	2.69
	21	8.02	5.78	4.87	4.37	4.04	3.81	3.64	3.51	3.40	3.31	3.17	3.03	2.88	2.80	2.72	2.64	2.64
	22	7.95	5.72	4.82	4.31	3.99	3.76	3.59	3.45	3.35	3.26	3.12	2.98	2.83	2.75	2.67	2.58	2.58
	23	7.88	5.66	4.76	4.26	3.94	3.71	3.54	3.41	3.30	3.21	3.07	2.93	2.78	2.70	2.62	2.54	2.54
	24	7.82	5.61	4.72	4.22	3.90	3.67	3.50	3.36	3.26	3.17	3.03	2.89	2.74	2.66	2.58	2.49	2.49
	25	7.77	5.57	4.68	4.18	3.85	3.63	3.46	3.32	3.22	3.13	2.99	2.85	2.70	2.62	2.54	2.45	2.45
30	7.56	5.39	4.51	4.02	3.70	3.47	3.30	3.17	3.07	2.98	2.84	2.70	2.55	2.47	2.39	2.30	2.30	
40	7.31	5.18	4.31	3.83	3.51	3.29	3.12	2.99	2.89	2.80	2.66	2.52	2.37	2.29	2.20	2.11	2.11	
60	7.08	4.98	4.13	3.65	3.34	3.12	2.95	2.82	2.72	2.63	2.50	2.35	2.20	2.12	2.03	1.94	1.94	
120	6.85	4.79	3.95	3.48	3.17	2.96	2.79	2.66	2.56	2.47	2.34	2.19	2.03	1.95	1.86	1.76	1.76	
∞	6.63	4.61	3.78	3.32	3.02	2.80	2.64	2.51	2.41	2.32	2.18	2.04	1.88	1.79	1.70	1.59	1.59	